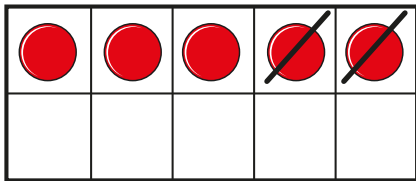
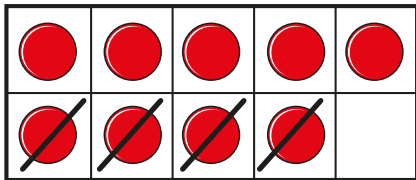


# How many left? (2)

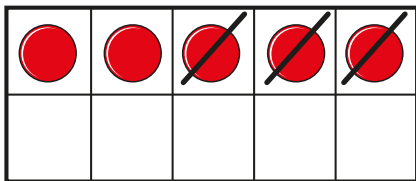
**1** Match the pictures to the number sentences.



$$9 - 4 = 5$$



$$5 - 3 = 2$$

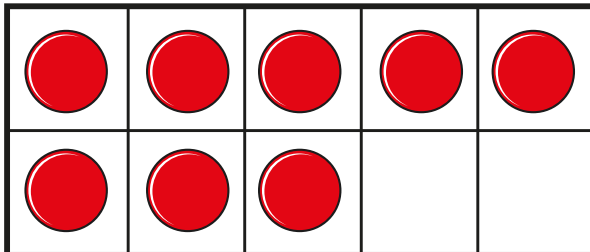


$$5 - 2 = 3$$

**2** Cross out the counters to show the subtraction.

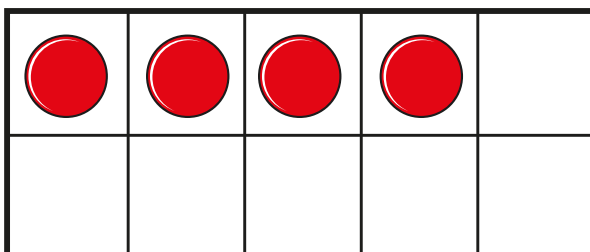


a)




$$8 - 2 = 6$$

b)



$$4 - 4 = 0$$

- 3 There are 10 cars in a car park.



4 cars leave.

How many cars are left in the car park?

$$\square - \square = \square$$

- 4 Annie and Amir have 9 strawberries in total.



Annie eats 2 strawberries and Amir eats 1 strawberry.

How many strawberries do they have left?



- 5 Complete the subtractions.

a)  $4 - 3 = \square$

c)  $5 - 3 = \square$

b)  $\square = 7 - 4$

d)  $\square = 6 - 1$

