

Miles and Miles


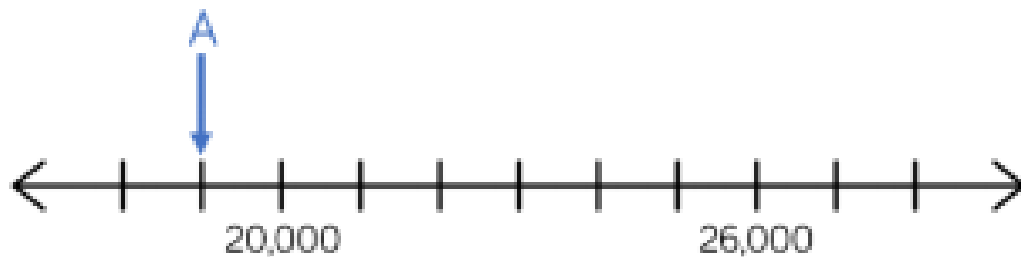
Mr Green drives a lorry. Last week he drove 197 miles, 232 miles and 164 miles on his 3 journeys.

This week he drove 309 miles and 265 miles on his 2 journeys.


What was the difference in mileage between this week and last week?



Find the difference between A and B.



Here is a bar model.



A is an odd number which rounds to 100,000 to the nearest ten thousand. It has a digit total of 30

B is an even number which rounds to 500,000 to the nearest hundred thousand. It has a digit total of 10

A and B are multiples of 5.

A and B are multiples of 5.

What are possible values of A and B?