




Counting On - Toy Problems


Help the children know how many toys they have by counting on.

1. Sally has  but gets 2 more. Start on number 1 and count on 2 more - what number did you land on? Colour it in.

0	1	2	3	4	5	6	7	8	9	10
---	---	---	---	---	---	---	---	---	---	----

3. Joe has 
 but gets 3 more. Start on number 2 and count on 3 more - what number did you land on? Colour it in.

0	1	2	3	4	5	6	7	8	9	10
---	---	---	---	---	---	---	---	---	---	----

3. Alex has  but gets 5 more. Start on Number 5 and count on 5 more - what number did you land on? Colour it in.

0	1	2	3	4	5	6	7	8	9	10
---	---	---	---	---	---	---	---	---	---	----