


Add more



- I There are 2 frogs in a pond.
4 more frogs jump in the pond.



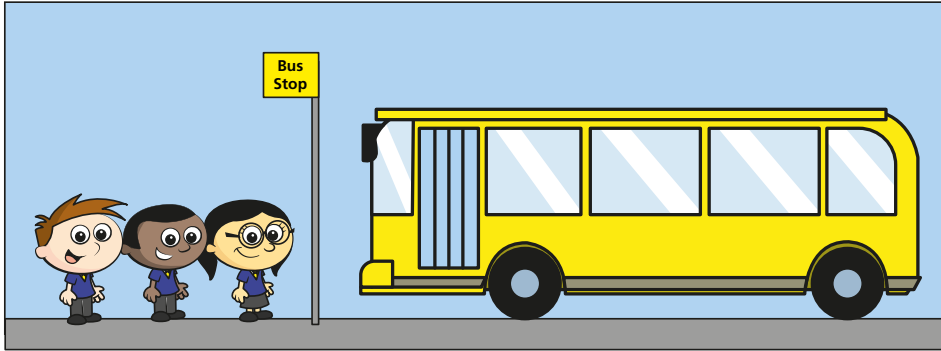
How many frogs are in the pond now?

$$\square + \square = \square$$

There are frogs in the pond now.



2 There are 5 children on the bus.



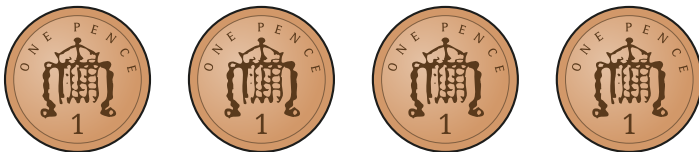
3 more children get on the bus.

How many children are on the bus now?

$$\square + \square = \square$$

There are children on the bus now.

3 Mo has this money.



Jack gives Mo 5 more pennies.

How many pennies does Mo have now?

$$\square + \square = \square$$


Mo has pennies now.

4

Eva has some coins.

Her mum gives her some more.

Now Eva has 8 coins.



a) How many coins does Eva have at the start?

Eva has coins at the start.

b) How many coins does Eva's mum give her?

Eva's mum gives her coins.

c) Complete the sentences in a different way.

Eva has coins at the start.

Eva's mum gives her coins.

d) How many answers can you find?

